

THE JAIN INTERNATIONAL SCHOOL KANPUR
SUMMER VACATION
HOLIDAY HOMEWORK (2024-25)
GRADE: V

Name: _____

ENGLISH	<p>Learn Chapter – Chuskit Goes to School</p> <ul style="list-style-type: none"> • Learn Poem– Have you earned your tomorrow • Do the given worksheets • Make a modal of “Parts of speech” • Do one page daily in English Cursive Writing Book.
HINDI	<p>दिए गए कार्य प्रपत्र को पूर्ण कीजिए। प्रतिदिन एक पेज सुलेख लिखिए। दिए गए विषय (विशेषण) पर मॉडल बनाइए। पृष्ठ संख्या १२(कांटों में राह बनाते हैं) कविता याद कीजिए।</p>
MATHS	<ol style="list-style-type: none"> 1. Prepare a working model of- A. Place Value (Roll. No. 1 to 5) https://youtu.be/AU-q24rLjgk?si=tHZKZNon1eX7N50v B. Expanded Form (Roll. No. 6 to 10) https://youtu.be/HjiomhQ3P34?si=vNgxLssHkJEx23Z NOTE- Student you can use above videos as reference for your project. 2. Do the given Sheet-
SCIENCE	<p>Learn chapter-2 The Skeletal System Do the given worksheets. Make a model of Roll No. 1 to 3 Solar water irrigation (working model) Roll No. 4 to 6 Model of digestive system using recycled materials Roll No. 7 to 10 Water Cycle or Simple Water Purifier</p>
S.ST.	<p>Do the given worksheets Make a model or chart of Roll no 1 to 5 Arunachal Pradesh (depicting the food, dress, historical places, dance, language, map etc) Roll no 6 to 10 Andhra Pradesh (depicting the food, dress historical places, dance, language, map etc)</p>
COMPUTER	<p>Roll No. 1 and 2 - Prepare a Model on the topic Invention and their inventors. Roll No. 3 and 4 - Make a model of Software and its types. Roll No. 5 and 6 - Make a model of Algorithm and Flowchart. Roll No. 7 and 8 - Make a model of Shortcut Keys of computer System. Roll No. 9 and 10 - Make a model of Types of Computer network. Learn chapter-1</p>
G.K.	<p>Roll No. 1 and 2 - Make a chart on Indian social reformers. (Ref Chapter- 5) Roll No. 3 and 4 - Make a chart on World Techies. (Ref Chapter- 15) Roll No. 5 to 7 - Make a chart on Sports Channels. (Ref Chapter- 25) Roll No. 8 to 10 - Make a chart on the Famous Brands. (Ref Chapter- 29) *Read Newspaper daily and make a collage on headlines (National, International, Local and sports) and write information in your Scrapbook.</p>
Art & Craft	<p><u>Art- Draw any one fruit and colour it with pencil colour</u> <u>Craft- making DIY craft by using waste material.</u></p>


The Jain International School
Subject – English
Holiday Homework

Name : _____


Class – V

Picture Composition

Write a story based on the pictures with the given helping words.



Helping words: teacher, giving detailed information, taking children to old age home, giving assigned tasks, cleaning, entertaining, talking, feeding, memorable day.





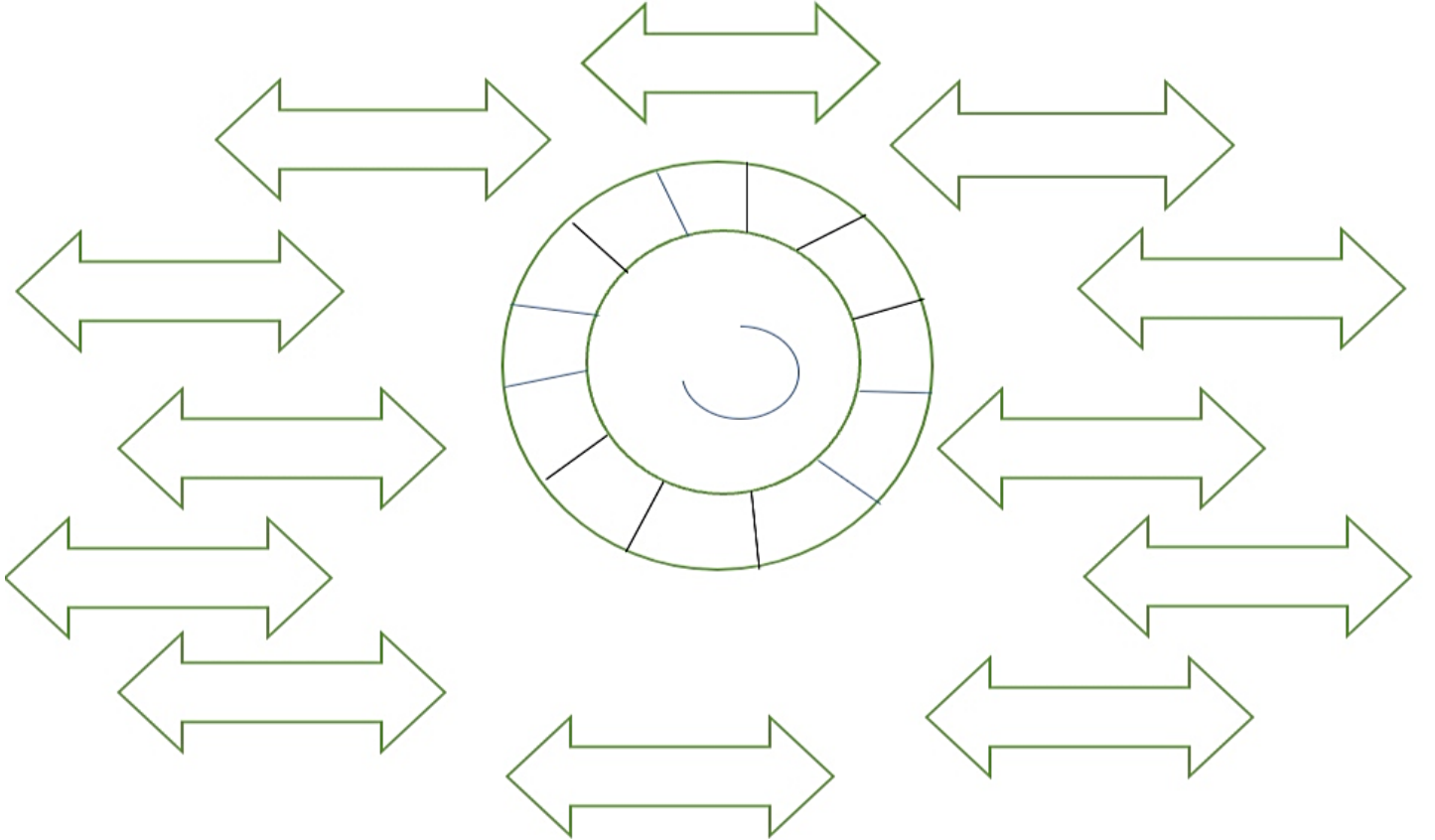
द जैन इंटरनेशनल स्कूल, कानपुर

कक्षा : 5

विषय : हिन्दी

ग्रीष्मावकाश गृहकार्य

1. वर्ष के हिन्दी महीनों का चक्र पूर्ण कीजिए एवं प्रत्येक महीने को विभिन्न रंगों से भरिए -



बताओ तो जाने -

(क) सप्ताह के आखिरी दिन का नाम -

.....

(ख) कौन - से महीने में 28 दिन होते हैं ? -

.....

(ग) साल के पहले महीने का नाम -

.....

(घ) गाँधी जयंती किस महीने में मनाई जाती है? -

.....

(ङ) साल के आखिरी महीने का नाम -

.....

Name - _____

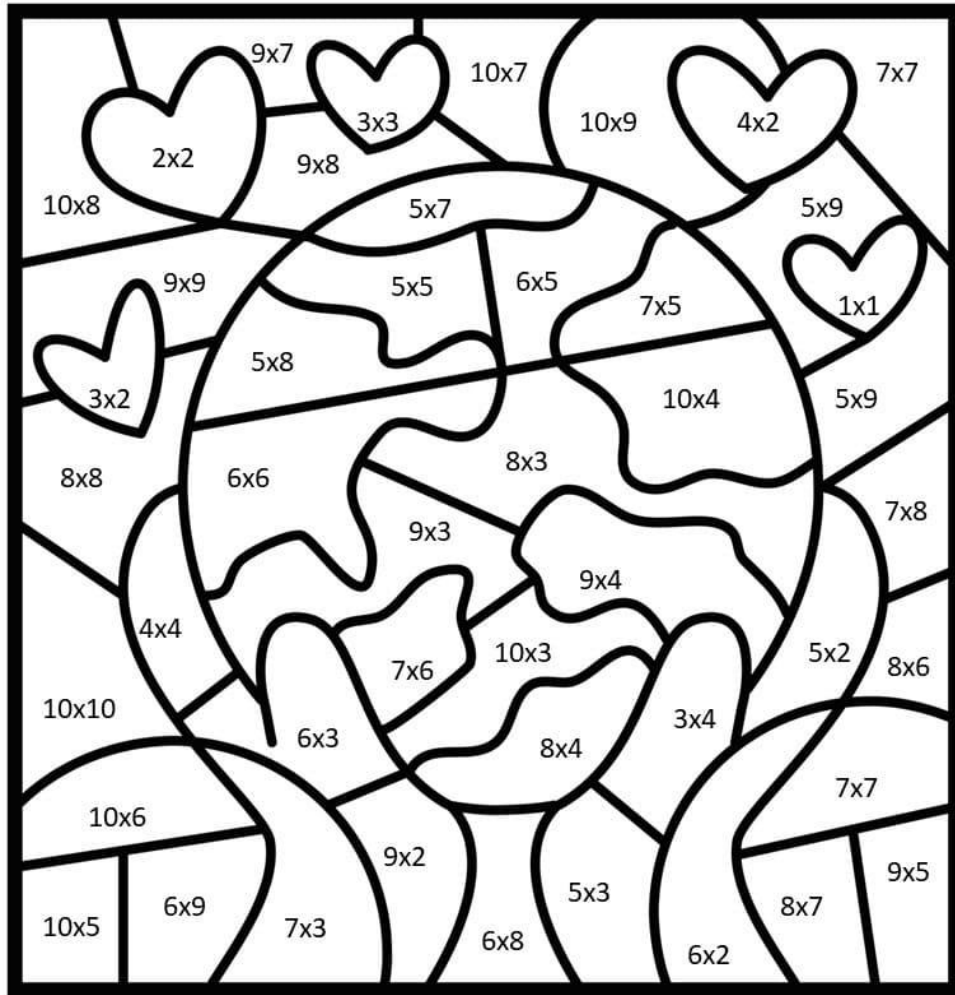
Class - V

Q1. Solve the Crossword puzzle -

				4	x	4	=						
						x							
						x	6	=					
x					=			x					
6	x	6	=							x	8	=	80
=									=				
60													

				9	x	3	=						
						x							
						x	5	=					
x					=			x					
4	x	6	=							x	6	=	18
=									=				
32													

QII. Color the given figure –



- 0-5 yellow
- 6-9 pink
- 10-15 brown
- 16-21 peach
- 24-30 blue
- 32-42 green
- 45-100 orange

QIII. Solve the following -

1. Roman numeral for the greatest three digit number is _____.
2. In 4,768,139 the digit 7 stands for _____.
3. How many digits are there in 1000?
4. Write the smallest and greatest five- digit number.
5. **Put the sign < or > between the given pairs of numbers where '<' means "smaller than" and '>' mean "greater than"**

(i) 315 531

(ii) 679 769

(iii) 967 769

(iv) 759 769

(v) 979 989

(vi) 131 129

(vii) 649 639

(viii) 539 585

(ix) 404 504

6. Write the following in ascending order:

(i) 30812, 31222, 30126, 30018

(ii) 51213, 513215, 51410, 51525

(iii) 61359, 91369, 81379, 70069

(iv) 50069, 57009, 55009, 50089

(v) 43020, 7180, 64000, 535123

7. Write the following in decreasing order:

(i) 50034, 50006, 50301, 50350

(ii) 31129, 31149, 33119, 311119

(iii) 61705, 77500, 87500, 97005

(vi) 53500, 57509, 56508, 57607

(v) 57922, 57121, 51378, 51577

(vi) 60300, 40800, 70500, 80787

(vii) 67895, 57996, 79005, 97897

8. What is 27,500,000 more than 422,500,000?

9. What is 1,000,000 less than 3,748,635?

10. If 18,793 is multiplied by 1000, then what is the product?

11. Find the quotient and remainder if 57,865,349 is divided by 100,000.

12. Compare actual and the estimated answer to the nearest 10. Put <,>.= sign.

(i) $4,866,720 + 3,618,270$ ____ $7,900,000$

(ii) 4996×312 ____ $1,200,000$

(iii) $1,203,592 \div 56$ ____ 5000

(iv) $6,833,005 - 5,542,806$ ____ $1,400,000$

The Jain International School, Kanpur
Subject: Science
Worksheet
Topic: The Human Body
Class -V

Name: _____

Date: _____

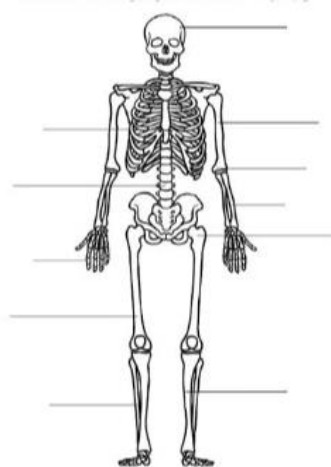
Q1- The function of the excretory system correlates to which of the following closely?

- a) Evaporation b) Condensation c) Filtration d) Sedimentation

Give one reason to support your answer.

Ans- _____

Q2- Label the parts of the organ system shown below and answer the following questions:-



a) Name the organ system shown in the given picture.

b) What are the different parts of a human skeleton?

c) How does this organ system help our body?

d) What is the another name of backbone?



The Jain International School, Kanpur

Subject: Science

Worksheet

Topic: Food and Health

Class -V


Name: _____

Date: _____

Q1- Often, the food we eat contains less nutrients and more fat. We should avoid eating such food items on a regular basis. Make a list of 5 food items that you should avoid eating or eat in very small amounts and write how do they harm our body.

Ans- _____

Q2- Which of the following is a dietary fibre? How does it help our body?



Ans- _____

Q3- Name the different components of food. Write how do they help our body.

Ans- _____

The Jain International School, Kanpur
Subject: Social Studies
Holiday Homework Worksheet 1
Class – V

Name:- _____

Date: _____

A. Fill in the blanks.

1. Sri Lanka is separated from India by
2. India can be divided into natural regions.
3. The east-west extent of India is about
4. A is an area of land that is surrounded by water on three sides.
5. The southernmost tip of the India mainland is

B. Answer the following.

1. Name three states along the Arabian Sea Coast.
.....

2. Name any five neighbouring countries of India.
.....

3. Name three countries which are bigger than India.
.....

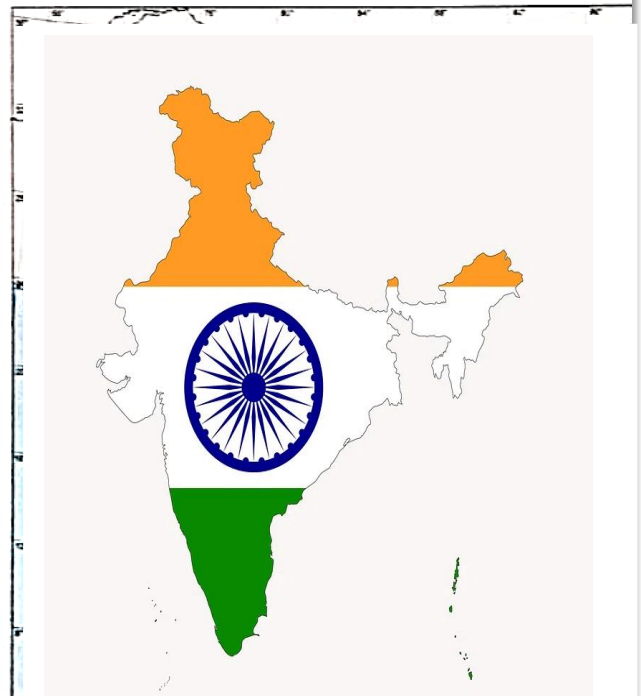
4. A state having the longest coastline in India.
.....

C. On an outline map of India mark the following.

States : Goa, Rajasthan, Manipur, Meghalaya,
Jharkhand, Uttar Pradesh, Kerala.

Union Territories : Chandigarh, Puducherry,
New Delhi and Daman & Diu.

Water Bodies : Indian Ocean, Bay of Bengal
and Arabian Sea.





The Jain International School, Kanpur
Subject: Social Studies
Holiday Homework Worksheet 1
Class – V

Name:- _____

Date: _____

A. Give three examples for each of the following :

1. Food crops :
2. Cottage industries :
3. Kharif crops :
4. Rabi crops :
5. Large scale industries :

B. Give examples of two states in which the following crops are produced.

1. Spices :
2. Cotton :
3. Coffee :
4. Sugercane :
5. Wheat :
6. Jute :
7. Rice :
8. Tea :

C. State the name of one centre for each of the following industries.

1. Aeroplane :
2. Automobile :
3. Ship Building :
4. Textile :
5. Railway Engine :
6. Iron and Steel :



The Jain International School, Kanpur
Summer Holiday Homework (2024-25)

Subject: Computer

Class –V

Name:- _____

Worksheet 1

A. Write the functions of the following shortcut key combinations.

- 1. Ctrl + U : _____
- 2. Ctrl + L : _____
- 3. Ctrl + B : _____
- 4. Ctrl + E : _____
- 5. Ctrl + J : _____
- 6. Ctrl + R : _____
- 7. Ctrl + I : _____
- 8. Ctrl + Shift + > : _____

B . Identify the following logos and write their names in the space provided.



C. Give two examples of each of the following:

- 1. Presentation software :
- 2. Graphics software :
- 3. Multimedia software :
- 4. Operating system :
- 5. Antivirus software :



The Jain International School, Kanpur
Summer Holiday Homework (2024-25)

Class –V

Subject: Computer

Name:- _____

Worksheet 2

A. Rearrange the following jumbled words.

1. IFLE : _____
2. CYCLERE NIB : _____
3. TANCORA : _____
4. FEOLDR : _____
5. REEMAN : _____

B. Tick the correct statements and cross the rest.

1. Shortcut menu is also known as Context menu.
2. Satya Nadella is the CEO of Microsoft since February 2014.
3. The Recycle Bin icon is marked with a wastepaper basket.
4. Google Chrome is the default web browser of Windows 10.
5. Windows 7 is the latest version of Windows operating system.

C. Guess who am I? Find and encircle these words in the following word grid.

1. I am an operating system developed by Microsoft. _____
2. I am a button which is located on the left corner of the taskbar. _____
3. I am a tiny graphic symbol present on the desktop. _____
4. I am a type of operating system. _____
5. I am an operating system that is developed by Apple. _____

W	I	N	D	O	W	S
O	C	L	S	G	B	T
X	O	P	T	U	O	A
P	N	L	G	I	M	R
R	S	M	A	C	E	T